

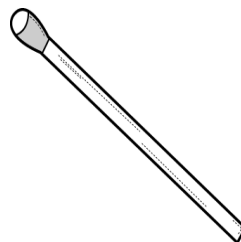
# Basic Forms of Energy

## Enrichment Activity

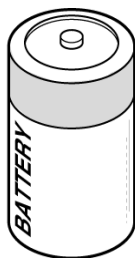
Study each situation shown below and decide whether it involves potential energy or kinetic energy. Write *chemical*, *potential* or *kinetic* in the spaces provided.




1. \_\_\_\_\_




2. \_\_\_\_\_




3. \_\_\_\_\_



4. \_\_\_\_\_



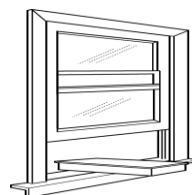
5. \_\_\_\_\_



6. \_\_\_\_\_



7. \_\_\_\_\_



8. \_\_\_\_\_